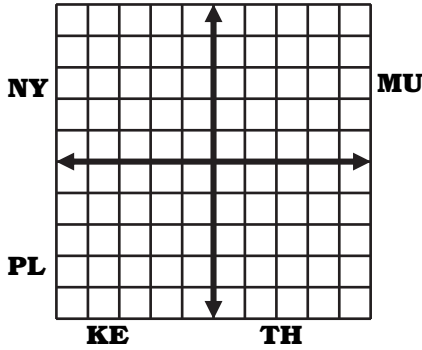




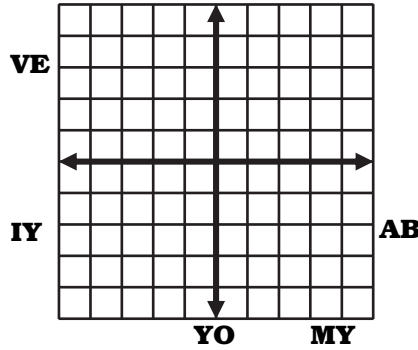
Why Did the Pirate Have a Paper Towel Hat?

Graph each equation and cross out a two letter combo for the bottom.

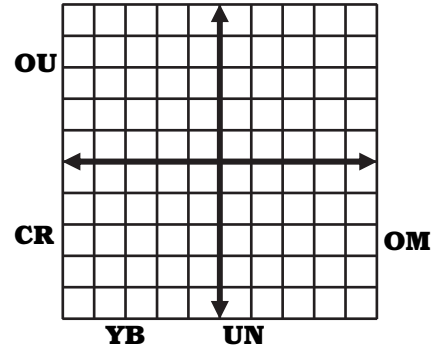
① $y = -4x + 3$



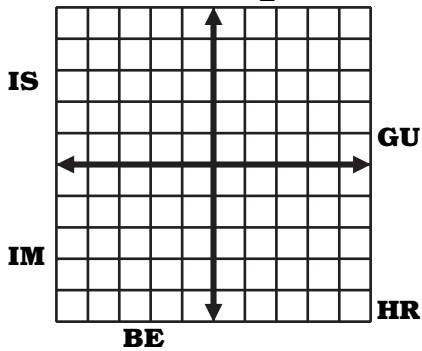
② $y = 6x - 5$



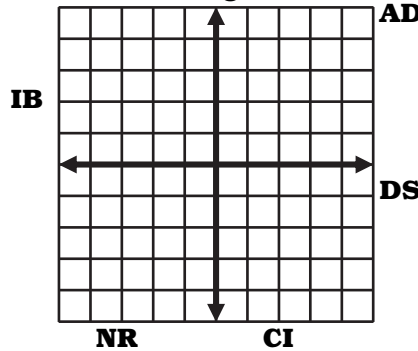
③ $y = -x - 2$



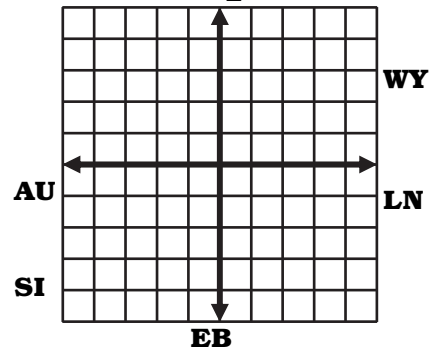
④ $y = -\frac{1}{2}x$



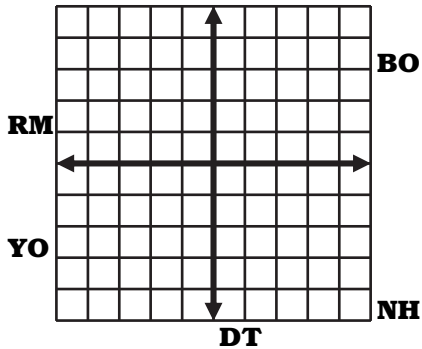
⑤ $y = \frac{2}{3}x + 1$



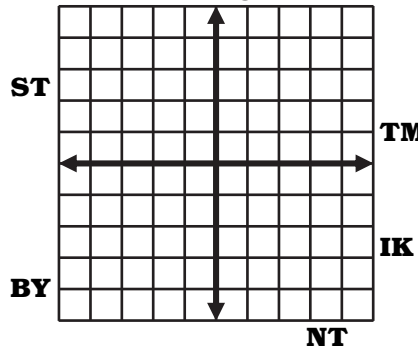
⑥ $y = \frac{7}{2}x - 4$



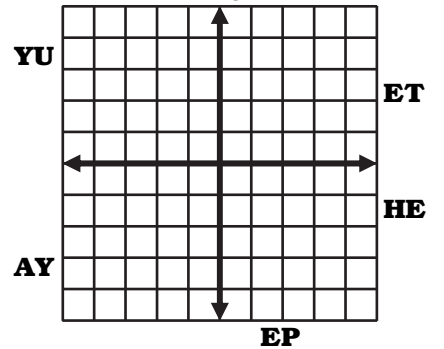
⑦ $y = -\frac{5}{4}x + 2$



⑧ $y = -\frac{8}{3}x + 4$



⑨ $y = \frac{2}{5}x - 4$



1	6	3	8	2	7	4	9	5