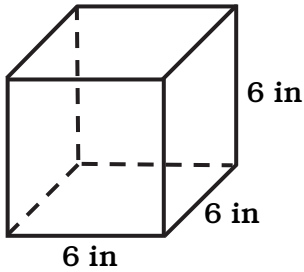




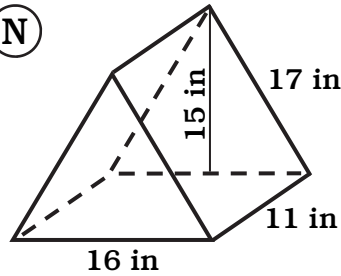
# WHAT MAKES MUSIC ON YOUR HAIR?

Find the surface area of the following shapes.

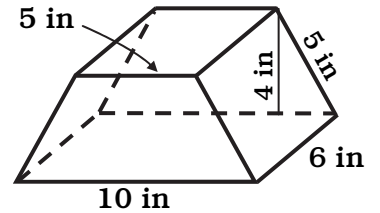
(D)



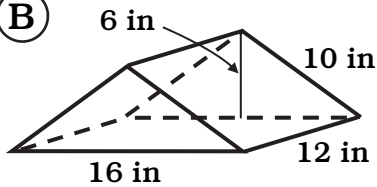
(N)



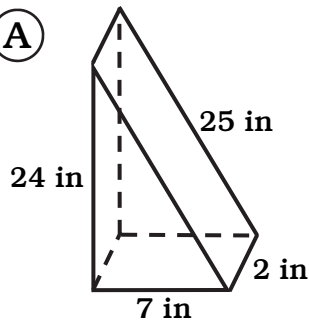
(E)



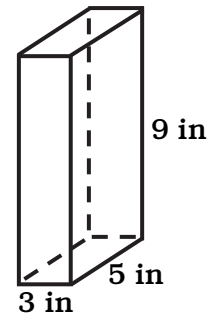
(B)



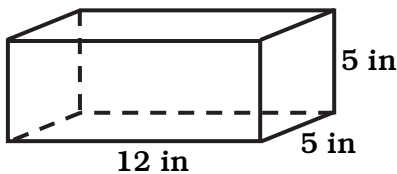
(A)



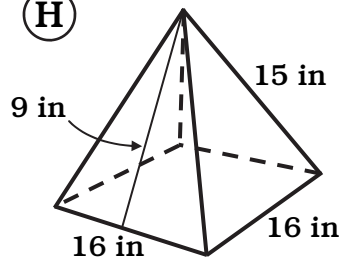
(A)



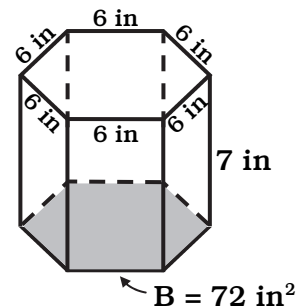
(D)



(H)



(A)



280 in <sup>2</sup>	200 in <sup>2</sup>	544 in <sup>2</sup>	210 in <sup>2</sup>	174 in <sup>2</sup>	216 in <sup>2</sup>	324 in <sup>2</sup>	528 in <sup>2</sup>	396 in <sup>2</sup>	790 in <sup>2</sup>	290 in <sup>2</sup>