

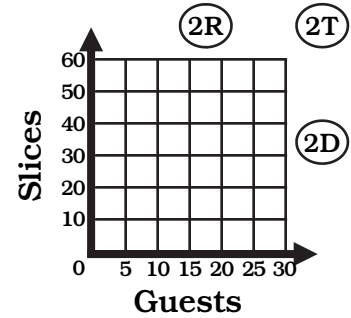
# Why Did the King Go to the Dentist?

Complete each table, then use it to draw a graph. Connect the points to cross out one number/letter combo to use at the bottom.

Samantha is having pizza at her party.  
Complete the table for the different number of guests.

Guests	1	5	(E)	15	18
Slices	2		24		

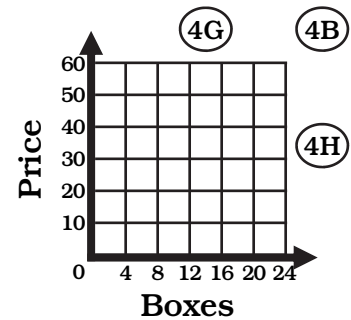
(H) (N) (E)



Jose buys cookies from the Girl Ambassadors.  
Complete the table comparing boxes and price.

Boxes	(R)	3	8	10	(T)
Price	5	15			55

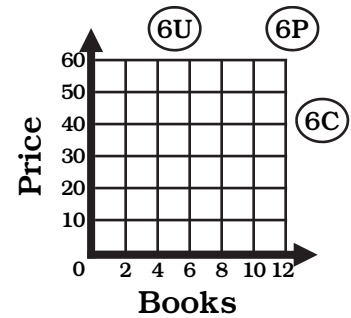
(E) (T)



Lily goes to the used bookstore.  
Complete the table comparing books and price.

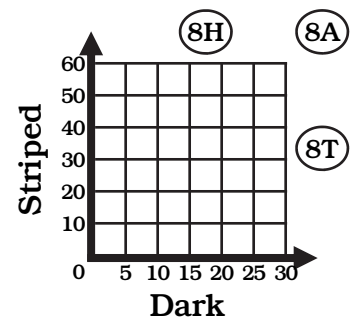
Books	1	3	5	(O)	9
Price		9		21	

(O) (D) (I)



Dark	1	4	(W)	8	14
Striped	4		20		

(T) (S) (E)



2	7	24	4	36	16	17	10	27	32	14	50	56	12	11	8	19	6	1	3	5	30	40	15	